



INDIAN SCHOOL AL WADI AL KABIR

DEPARTMENT OF MATHEMATICS (2022-2023)

TOPIC: NUMBERS

RECALL WORKSHEET


RESOURCE PERSON: Ms. ANJALI BARLA

NAME: _____ CLASS: III SEC: _____ DATE: _____

I. Read the instructions carefully and do as directed.





- 1) Compare the numbers using $>$, $<$ or $=$ and put the correct sign in the boxes given below.

245 145 120 150



- 2) Write the greatest two - digit number. _____

- 3) Arrange the following numbers in ascending order:

 531	 508	 599	 516
--	--	--	--

- 4) In the number 952, the digit 5 is in the _____ place. (Complete the sentence.)

- 5) Circle the fish that has the greatest value?



6) Find the Predecessor and the Successor of 390.

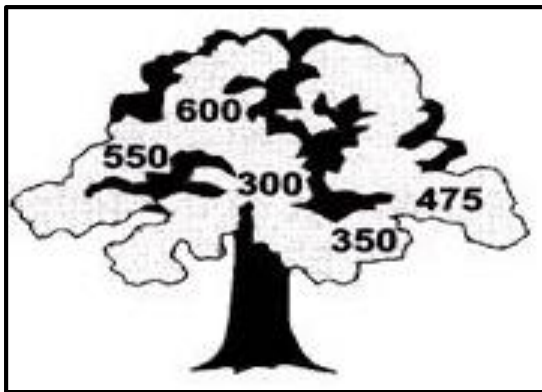
Predecessor _____, Successor _____

7) Write the number for the given Expanded Form.


$$600 + 90 + 6 = \underline{\hspace{2cm}}$$

8) Observe the numbers written on the picture of the tree given below and answer the question that follows.

Which number is more than 400 but less than 500? _____



9) Arrange the following numbers in descending order.

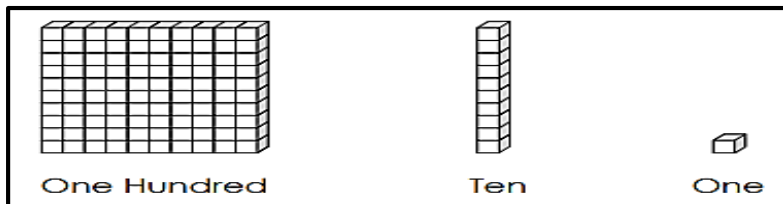


10) The number having 5 in the Tens place, 1 in the Ones place and 7 in the Hundreds place is:

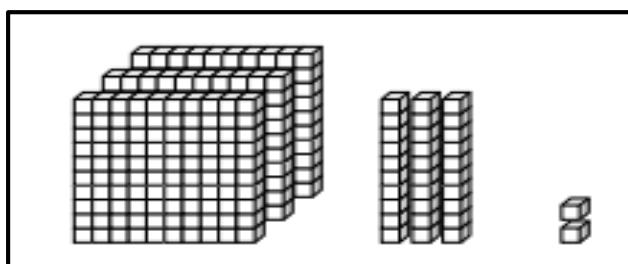
H	T	O

Write the number in words.

11) Let us represent one hundred, ten and one as shown below.



What number does the picture given below represent?



Write the number and number name.

Number: _____

Number name: _____

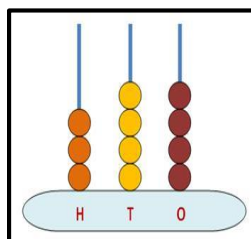
12) Write the Face Value and the Place Value of the underlined digits.

a) 275 - Face Value _____ Place Value _____

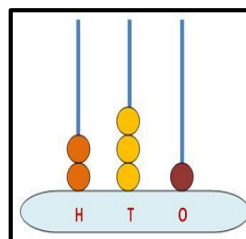
b) 331 - Face Value _____ Place Value _____

13) Write the number shown by each abacus.


a)



b)



14) The numbers written on the pictures of the balloons follow a certain pattern. Observe the number pattern and find the hidden number?



15) Jyoti has this set of number cards.



What is the greatest possible 3-digit number that can be formed by using all the cards each only once? _____

